

# Worksheet 14

## Solving Word Problems

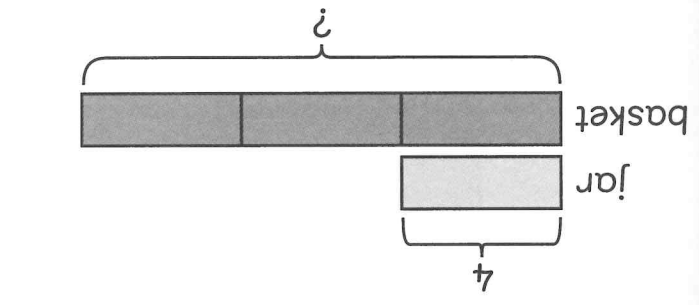

Solve.

1

There are 4 cookies in a jar.

There are 3 times as many cookies in a basket as in the jar.

How many cookies are there in the basket?

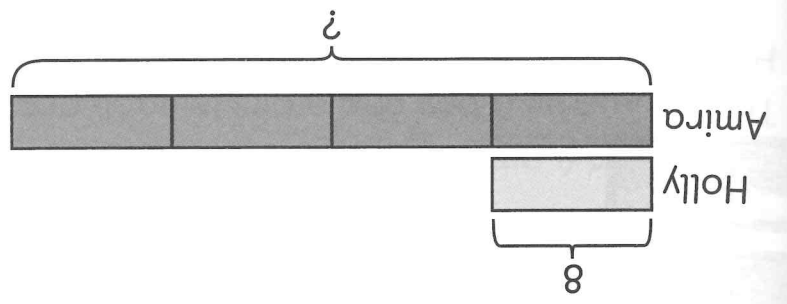


$$\boxed{\phantom{000}} = \boxed{\phantom{000}} \times \boxed{\phantom{000}}$$

There are  cookies in the basket.


2

Holly has 8 pens. Amira has 4 times as many pens as Holly. How many pens does Amira have?



$$\boxed{\phantom{000}} = \boxed{\phantom{000}} \times \boxed{\phantom{000}}$$

Amira has  pens.



Name: \_\_\_\_\_ Class: \_\_\_\_\_ Date: \_\_\_\_\_